

Uranus
Grade 6

WORKSHEETS

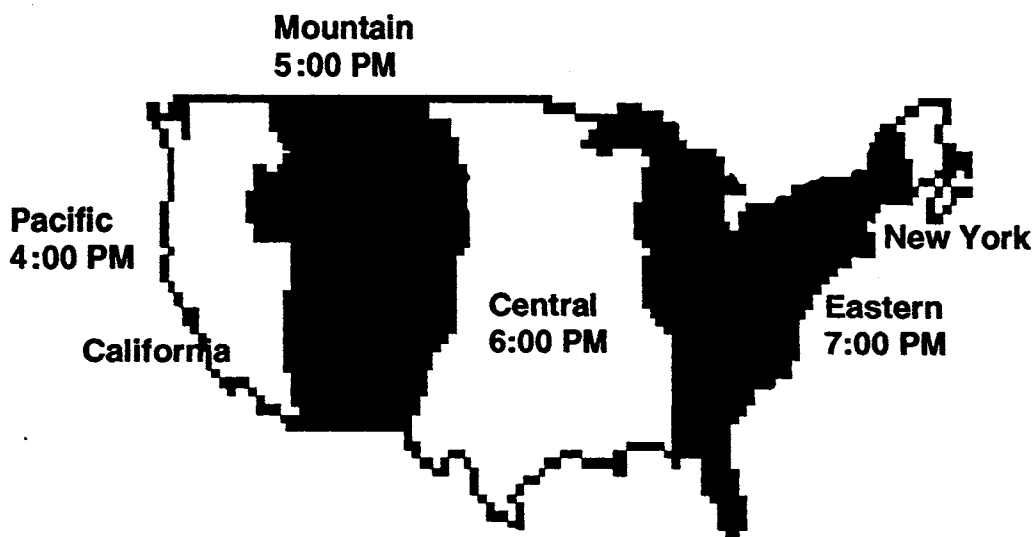
SUNSHINE MATH - 6

Uranus, I

Name: _____

(This shows my own thinking.)

- ★★ 1. The map below shows the four time zones in the United States. Use the map to help you answer the following questions.



- a. If it is 11:00 A.M. in California, what time is it in New York?

Answer: _____

- b. If you left San Francisco, California, at 10:30 P.M. on a six hour flight to Miami, what time would it be in Miami when you landed?

Answer: _____

- ★ 2. Rusty can cut a log into 3 pieces in 20 minutes. At that rate, how long will it take him to cut another such log into 6 pieces?

Answer: _____

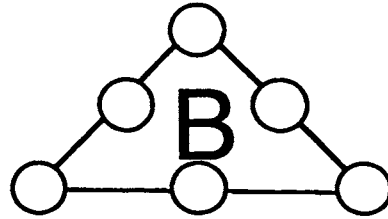
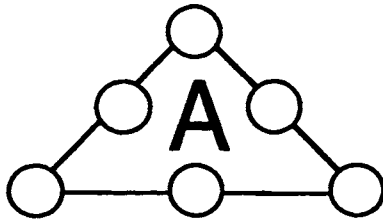
- ★★★ 3. Find three prime numbers, all less than 30, whose product is 1955.

Answer: _____, _____, and _____

- ★★ 4. One way to write 99 using four nines is $(9 \times 9) + (9 + 9)$; another way is $99 + (9+9)$. Write 100 using four nines.

Answer: _____

- ★★ 5. Put the numbers 1, 2, 3, 4, 5, and 6 in the circles below so that the sum "along a line" is 11 in figure A, and 12 in figure B.



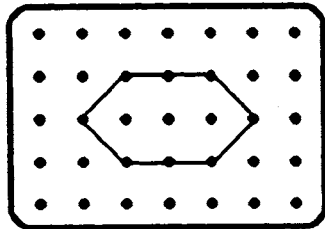
- ★★★★ 6. A train that is 1 mile long starts through a tunnel that is also 1 mile long. The train is traveling 15 miles per hour. How long does it take for the train to get completely out of the tunnel?

Answer: _____



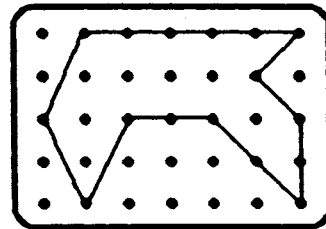
- ★★★ 7. Find the area of each polygon.

a.



Answer: _____ square units

b.




Answer: _____ square units

- ★★ 8. An equation for the situation to the right is:

$$2D + 25 + 5 + 1 = 61.$$

Solve the equation by finding how much one duck weighs.

Answer: $D =$ _____




SUNSHINE MATH - 6

Uranus, II

Name: _____

(This shows my own thinking.)

- ★★★ 1. Make an **X** on each of four toothpicks you could remove so that exactly 7 squares, all the same size, would be left.




- ★★ 2. Joe keeps all his socks in one drawer. He has 7 blue socks and 9 brown socks. If he reaches in the drawer without looking, what is the least number of socks he can take out to be sure of getting a pair of the same color?

Answer: _____ socks

- ★★★ 3. The total price of a dictionary and an almanac is \$32. The total price of 2 dictionaries and 3 almanacs is \$86. What is the price of each book?



↔ \$32

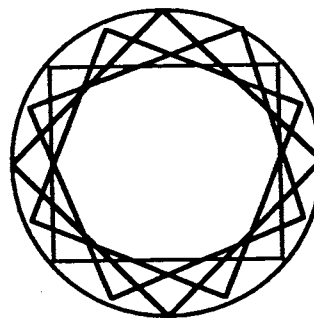


↔ \$86

Answer: The cost of a dictionary is _____. The cost of an almanac is _____.

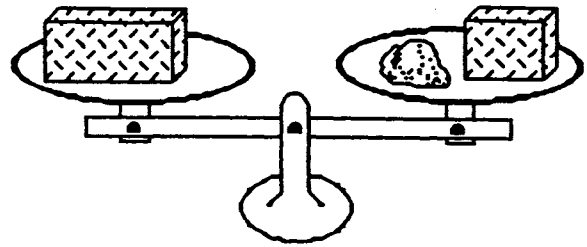
- ★ 4. How many squares are there in the circle?

Answer: _____ squares



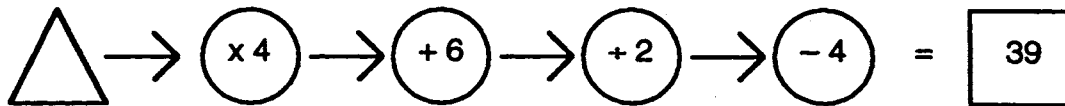
- ★★ 5. 5 years, 21 days, 4 hours, 32 minutes, 17 seconds
- 2 years, 93 days, 7 hours, 47 minutes, 24 seconds

- ★★★ 6. If a brick weighs exactly as much as a 9-pound rock plus half of another brick, what does a brick and a half weigh?



Answer: _____ pounds

- ★★ 7. Write a number in the \triangle that will give the answer 39.

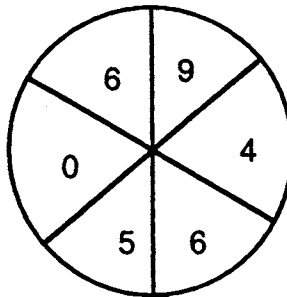


- ★ 8. How many of the 28 students in Andy's class are boys, if $\frac{4}{7}$ are girls?

Answer: _____ boys

- ★★★★ 9. If you made a spinner out of the circle below for a game you invented, what is the probability that the arrow would land on:

- a. zero? _____ c. a number greater than 9? _____
 b. an odd number? _____ d. either an odd number or 0? _____



SUNSHINE MATH - 6
Uranus, III

Name: _____
(This shows my own thinking.)

- ★ 1. The Adrians were going to grandmother's house for Thanksgiving. They traveled 283 miles in 6 hours. Did they average more or less than 50 miles per hour?


Answer: _____

- ★★★★ 2. Martha bought a \$60 skirt at 40% off and a \$40 blouse at 20% off. What percent discount did she receive on the total purchase?

Answer: _____

- ★ 3. Count the dots.

Answer: _____ dots



- ★★★ 4. When 3 times a certain number n is added to 6, the sum is 20 more than the original number. What is the number n ?

Answer: $n =$ _____

- ★★ 5. On February 19, the temperature in Orlando was 78° Fahrenheit. In Fairbanks, Alaska, the temperature was -49° F. What was the difference in these temperature readings?

Answer: _____ $^{\circ}$ F

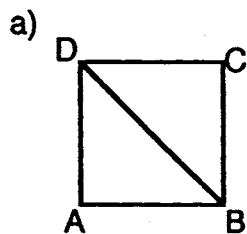
- ★★★ 6. Mrs. Gonzales has three children whose names are Javier, Juan, and Rosa. Their mean age is 11. Their median age is 10. Rosa is 15 years old. What is the age of the youngest child?

Answer: _____

★★★ 7. These values were used to find the total score for the figures in the examples below:

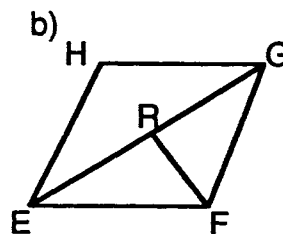
Triangle = 3 points
 Quadrilateral = 4 points
 Pentagon = 5 points
 Hexagon = 6 points

Examples:



2 triangles
 1 quadrilateral

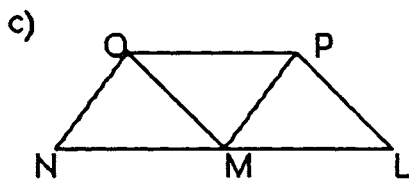
Score = 10



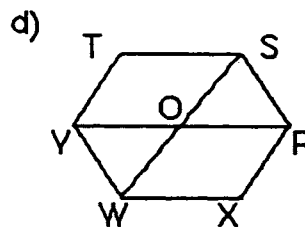
4 triangles
 1 quadrilateral
 2 pentagons

Score = 26 Total Score = 36

Now you do these. Find the total score for figures c and d. Add the scores for c and d and give the total score.



Score _____



Score _____ Total Score: _____

★ 8. Write what goes in the if $a = 4$.

$$3 + a + 7 - 5 + 10 + a - a = \boxed{}$$

★★★ 9. If two prime numbers differ by 2, they are called TWIN PRIMES. List all the twin primes less than 50.

Answer: 3 & 5, _____

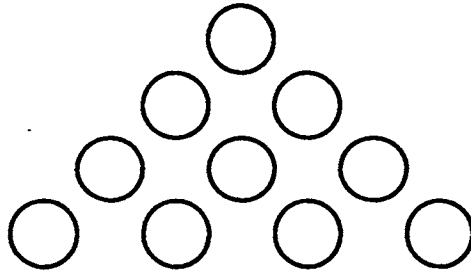
SUNSHINE MATH - 6
Uranus, IV

Name: _____
(This shows my own thinking.)

- ★ 1. In one 7-day week, how often does a clock show 3 o'clock?

Answer: _____

- ★★★ 2. Here is a triangle made of discs. Move only 3 discs and turn the triangle upside down. Draw arrows to show how you would move them. Practice with pennies if it will help you.



- ★★ 3. A furniture shop makes only tables and stools. Each table has four legs and each stool has three legs. The legs for both the tables and stools are the same. How many tables and how many stools can be made from 32 legs if some of each are made?

Answer: _____ tables and _____ stools

- ★ 4. If a regular octahedron has a surface area of 48 square inches, what is the surface area of each face?

Answer: _____

- ★★ 5. The thousands digit of a 4-digit number is 4 greater than the hundreds digit. The tens digit is 2 times the thousands digit. The ones digit is one-half the thousands digit. What is the number?

Answer: _____

- ★★ 6. If you put a million sheets of 30-cm long paper end-to-end, how many kilometers long would the paper be from beginning to end?

Answer: _____

- ★★★★ 7. Amy, Betty, David and Ed have last names of Gonzales, Jackson, Keller, and Perez, though not in that order. They recently participated in a 1500-meter race and they all finished the race in a different position. From the clues below match the first and last names and determine in what order they finished the race.


- a) Jackson said she would have finished higher if she had not slipped at the start of the race.
- b) Ed finished ahead of Perez, but behind Betty.
- c) Amy finished directly behind Gonzales.
- d) Neither David nor Ed finished third.

Answer: Amy _____ finished ____; Betty _____ finished ____;
David _____ finished ____; Ed _____ finished ____.

- ★★ 8. The newspaper used rounded off numbers to report that about 70,000 people attended the University of Florida vs. Florida State University football game last year. What is the greatest number of people that could have attended that game?

Answer: _____

- ★★★ 9. A farmer has three roosters. She keeps them in three pens like the ones shown below. She sold a cow and bought another rooster, but did not have enough money to build another pen. How can she rearrange the three pens she has to make a fourth pen? All the pens should be the same size and shape. Draw a picture below to show your solution.



SUNSHINE MATH - 6

Uranus, V

Name: _____
 (This shows my own thinking.)

- ★★★★ 1. Assign values to each letter so that the message becomes a meaningful addition example. Write your answer as an addition example beside the one below.

$$\begin{array}{r} \text{CROSS} \\ + \text{ROADS} \\ \hline \text{DANGER} \end{array}$$

Answer:

- ★★★★ 2. Every hour, on the hour, a train leaves Tallahassee for Jacksonville, while another train leaves Jacksonville for Tallahassee. The trip between the two cities takes exactly two hours. How many of the trains going in the opposite direction will a Tallahassee train to Jacksonville meet?



Answer: _____ trains


- ★★ 3. James purchased 3 hamburgers, 1 hot dog, 4 orders of French fries, and 4 soft drinks. The sales tax is 6%. How much change will he get from his \$20?

MENU			
Hamburger	95 ¢	Milk	65 ¢
Hot dog	85 ¢	Soft drink	79 ¢
Grilled cheese	75 ¢	Milk shake	99 ¢
French fries	89 ¢	Ice cream	69 ¢

Answer: _____ as change

- ★★ 4. At the beginning of a game of checkers, what percent of the squares are not covered by checker pieces?

Answer: _____ %



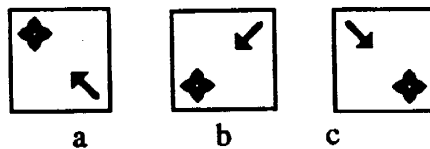
- ★ 5. On his way to school, Skip counted 17 trees on the right side of the street. On the way home he counted 17 trees on the left side of the street. How many different trees did he count in all?

Answer: _____ trees

- ★★ 6. Look at this figure:



What is the correct order for these three figures to show the one above being turned 90°, another 90° and another 90°, all in the clockwise direction?



Answer: The order is _____, _____, and _____.

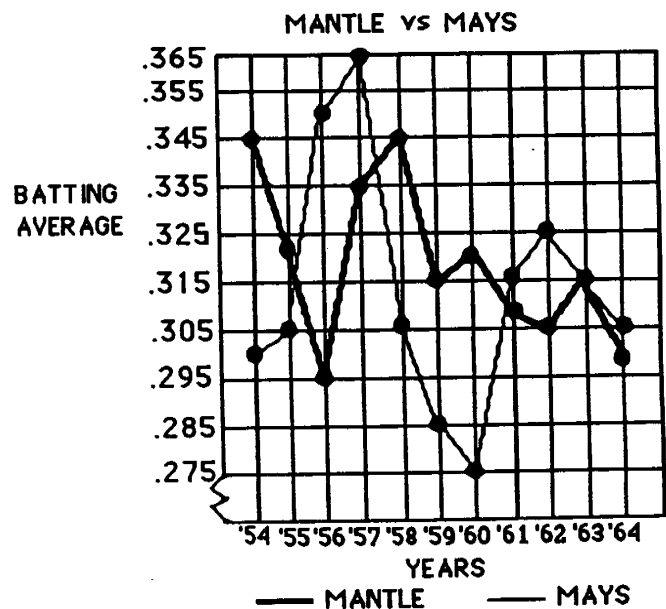
- ★★ 7. Pluto is about 5,900,000,000 kilometers from the sun. Scientists use a shortcut for recording large numbers called *scientific notation*. Write the distance from Pluto to the sun using this shortcut.

Answer: _____ km

- ★★★ 8. Two of the great baseball players of this century are Willie Mays and Mickey Mantle. The graph below shows their end of year batting averages over the years from 1954 to 1964.

- In which year did they both have the same average?

- In which year did they both average more than 1 hit in every 3 at bats? _____
- Which hitter had the smallest range between his best year and his worst year, batting-wise? _____



SUNSHINE MATH - 6

Uranus, VI

Name: _____

(This shows my own thinking.)

- ★★ 1. The world record for limbo dancing under a flaming bar is $6\frac{1}{8}$ inches. The record for roller skating under a limbo bar is $5\frac{1}{4}$ inches. How much lower is the record on roller skates, than without roller skates?

Answer: _____ inches


- ★★ 2. Fill in the squares using non-zero digits.

Also, place the decimal point correctly

in the answer.

$$\begin{array}{r}
 .25 \\
 \times 3.\square \\
 \hline
 17\square \\
 \square 50 \\
 \hline
 \square 25
 \end{array}$$

- ★★★ 3. The edge of each of the cubes in the picture below has a measure of 1 inch. What is the total surface area of the figure, including the bottom?



Answer: _____ square inches

- ★★ 4. If the moon takes an average of $27\frac{1}{3}$ days to revolve around the Earth, which is the closest estimate for the number of hours it will take? Circle your answer.

a) 400 hours b) 650 hours c) 1025 hours d) 900 hours

- ★★ 5. Find the number of letters in America's first President's last name. Multiply it by the number of letters that differ between the last names of America's second President and sixth President. What is your answer?

Answer: _____

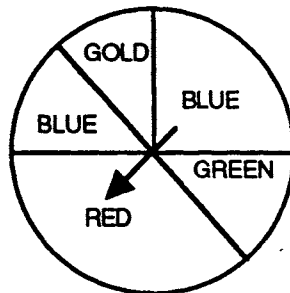
- ★ 6. Scientists predict that by the year 2080, the Earth and its manned space stations will be inhabited by 4,327,650,189,012 people. Round this number to the nearest billion.

Answer: _____

- ★★ 7. Solve the following problem using Roman numerals. Be sure to give you answer as a Roman numeral.

$$(XL \div X) + XVI - XIX = \underline{\hspace{2cm}}$$

- ★★★★ 8. The picture below represents a spinner. Find the probability of hitting each of the following colors. Give your answers as lowest term fractions.



a) red: _____ b) blue: _____ c) gold or green: _____ d) orange: _____

- ★★ 9. A sandwich shop sells hamburgers and hot dogs. They offer French fries, chips and pretzels as side orders. They also have soda, milk or juice to drink. How many different combinations of a sandwich, a side order, and a drink are possible from their menu?

Answer: _____ combinations

- ★★ 10. There are 24 students in Mrs. Perimeter's class. If $87\frac{1}{2}\%$ of them passed their mathematics test, how many students did not pass?

Answer: _____ students did not pass


SUNSHINE MATH - 6
Uranus, VII

Name: _____
(This shows my own thinking.)

- ★★ 1. A winning basketball team earned 336 points in the first 4 games last season. One-eighth of their points were made on 3-point shots. How many 3-point baskets had they made after four games?

Answer: _____ baskets

- ★★★ 2. Each large block below weighs the same amount. Each small block weighs the same amount. From looking at the pictures, find the weight of both the small and large blocks.




Answer: A small block weighs _____ grams.

A large block weighs _____ grams.

- ★★★ 3. What is the probability that you will roll a sum of 7 on one roll of a standard pair of dice?

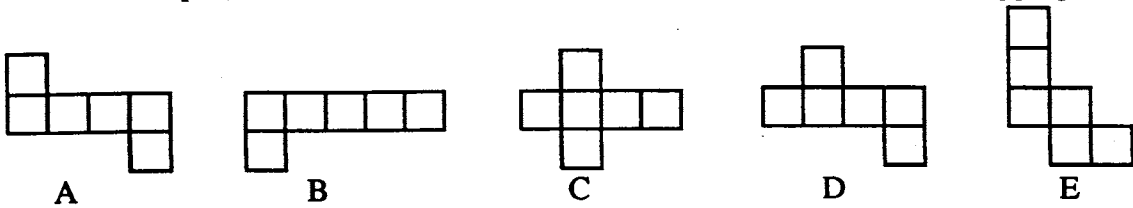
Answer: _____

- ★★ 4. In lowest terms, what fraction of the large square is shaded?



Answer: _____

- ★★ 5. Circle the shapes below that can be folded to form a closed box with no overlapping sides.

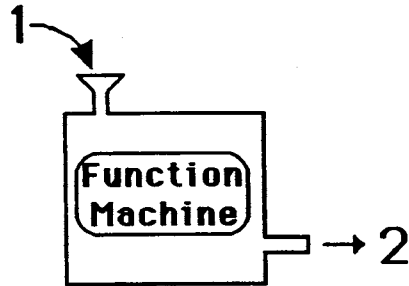


- ★ 6. Alfonso took a 40 question test. How many can he miss and still make an 85%?

Answer: _____ questions can be missed.

- ★★★ 7. A function machine is set up so that when an *input number* is dropped into the machine, a predictable *output number* comes out. When 1 is dropped in, for example, 2 comes out. Study the pattern of input and output numbers in the chart below, and fill in the missing numbers.

INPUT	OUTPUT
1	2
2	5
3	10
4	17
5	
6	
7	



- ★★★ 8. a. For the function machine in problem 7, what number was the *input* number for the *output* number 101? _____
- b. If the input number is called n , what would the *output* number be? _____

- ★ 9. Beth, Michael, Gale, Maria, and Dot are all different ages. Gale is older than Beth and younger than Michael. Maria is older than Michael. Dot is older than Beth and younger than Gale. List the names of the 5 people from the oldest to the youngest.

Answer: _____

SUNSHINE MATH - 6
Uranus, VIII

Name: _____
(This shows my own thinking.)

- ★ 1. What fraction is equivalent to $\frac{4}{5}$ and has a denominator that is 4 more than its numerator?

Answer: _____

- ★★★★ 2. A man weighing 80 kg. and his two children, each weighing 40 kg., want to cross a river. Each can row the boat they must use. The boat can carry only 80 kg. What is the least number of crossings that can be made to get from one side of the river to the other? (A crossing means going from one side of the river to the other side -- not a round trip.)

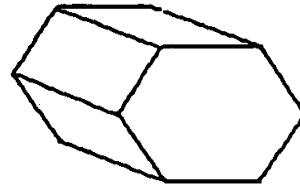
Answer: _____ crossings

- ★★★ 3. A hexagonal prism looks like the picture to the right. What is the total number of:

a. *faces* on the shape? _____

b. *edges* on the shape? _____

c. *vertices* on the shape? _____



- ★★★ 4. Sarah's age is three times Anthony's age. Four years from now, Sarah will be twice as old as Anthony. How old is Sarah now?


Answer: _____

- ★★★ 5. Diane counted 28 geese and horses on the farm. Altogether, there were 78 legs on all of the animals. How many were geese?

Answer: _____ geese


- ★ 6. In the space below, show how to combine six 1's so that their sum is 123.

- ★★ 7. Maria likes to weigh her toy animals. She found that the animals below balanced the gram weights in her science kit. Three elephants and 2 donkeys balanced 28 grams; two elephants and 1 donkey balanced 17 grams. Maria says she can now tell how much both animals weigh. Are you as clever as Maria?



Answer: An elephant is _____ grams; a donkey is _____ grams.

- ★★★★ 8. A checkerboard is made from a number of small squares. Four of the small squares can be grouped so that a larger square is formed. Nine of the small squares can be grouped so that even a larger square is formed. This process can be continued, up to all 64 small squares making one huge square. How many squares altogether can be formed on a checkerboard?



Answer: _____ squares

- ★★★ 9. Thomas works for his dad. He was given the choice of:
 (a) working for 25 days at \$15.00 per day, or
 (b) working for 25 days and doubling his wages every day, beginning with 1¢ the first day, 2¢ the second day, 4¢ the third day, 8¢ the fourth day, etc.

Which choice, (a) or (b), will give Thomas the greater pay and how much more pay than the other choice?

Answer: Choice _____ will give him \$ _____ more.

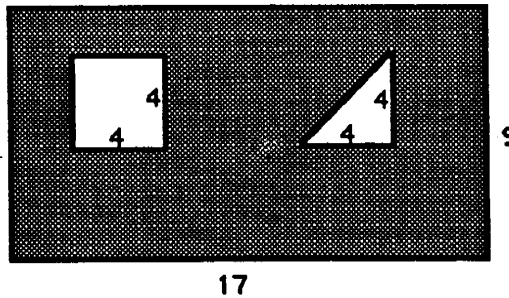
SUNSHINE MATH - 6
Uranus, IX

Name: _____
(This shows my own thinking.)

- ★ 1. Look at the pattern. Fill in the next two numbers.

1, 1, 2, 3, 5, 8, 13, _____, _____

- ★★★★ 2. The 17-inch-by-9-inch piece of cardboard below has two holes that were cut from it. What is the area, in square inches, of the remaining cardboard?



Answer: _____ square units

- ★★ 3. Susan challenged a friend with this problem:

Multiply the square root of 49 by 10 and subtract 50.
Then multiply that number by 7.
Now find $\frac{1}{5}$ of the product.

What is the answer to Susan's problem? _____

- ★★★ 4. Here's a number trick:

*Chose a number from 1 to 9.
Double it.
Add 5.
Multiply your result by 5.
Subtract 25.
Remove the ones digit.
Viola! You have your original number back.*

Does this number trick always work? Answer: _____ (yes or no)

- ★★★ 5. A high school track record that remained unbroken for over thirty years is Jim Ryun's 1965 mile run of 3 minutes, 58.3 seconds. Essentially he ran 1 mile in 4 minutes. What was his average speed, to the nearest whole number, in miles per hour?

Answer: _____ miles per hour



- ★★ 6. If Andy's average pulse rate is 72 beats per minute, about how many times will his heart beat in a day? Give your answer rounded to the nearest thousand beats.

Answer: _____ beats

- ★★★ 7. Jim's Sport Shop sells four pairs of roller blades for every three skateboards. Last week he sold sixteen pairs of roller blades. How many more pairs of roller blades did Jim sell than skateboards?

Answer: _____

- ★★ 8. Tamika took five math tests. Her teacher reported she had an average score of 91, but had lost one of Tamika's tests. The four the teacher had showed scores of 86, 92, 88, and 96. What was her score on the lost test?

Answer: _____

- ★★ 9. A real estate broker sold a house for \$120,000. Her commission was 8% of the selling price.

- a. How much money did she earn in commission?

Answer: _____

- b. If she had to pay 28% of her commission in income tax, how much did she have left to spend?

Answer: _____



SUNSHINE MATH - 6

Uranus, X

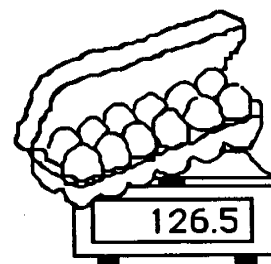
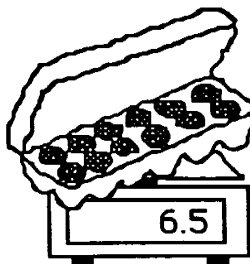
Name: _____
 (This shows my own thinking.)

- ★ 1. Multiply 37 by 3. Now multiply 37 by 6. What would you have to multiply 37 by to get all fives?

Answer: _____

- ★★★★ 2. Solve each problem.

- a. A 12-pak of colas cost \$4.48, including tax of \$0.28. How much would each cola cost, without tax? _____
- b. Maria put 5 pups in a cage to send them on an airplane. The total weight was 90 pounds. The cage by itself was 25 pounds. On average, how much did each pup weigh? _____
- c. Garth gets to watch 15 hours of TV each week. There are only 5 hour- long shows he watches each week. How many half-hour shows can he watch? _____
- d. The scale shows grams. How much does one egg weigh?
 _____ grams



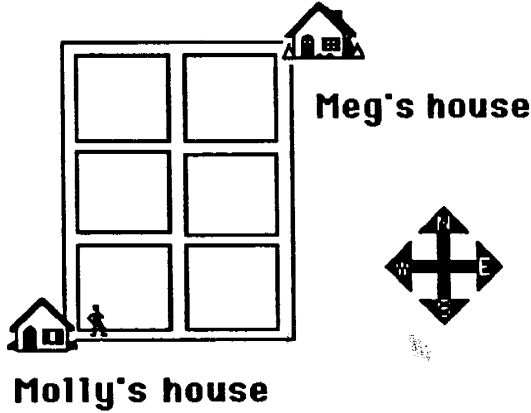
- ★★★ 3. Place the numbers 1 to 16 in the grid so that each row, column and diagonal will have a sum of 34. Some numbers have been placed for you.

		3	
	11	10	
9			12
		15	1

- ★★ 4. If a 27 in^3 jar of peanut butter holds 16 ounces, how much peanut butter is in a jar that is 67.5 in^3 in volume?

Answer: _____ ounces

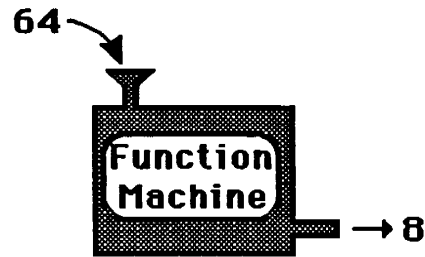
- ★★★ 5. Molly and Meg are good friends who like to visit each other often. The map below shows the location of the two girls' houses. Molly decided to find all the different ways to get to Meg's house from hers. She can move only in the direction of east and north. How many different routes are there for Meg to use?



Answer: _____ routes

- ★★ 6. The function machine below shows what happens to a number dropped in the input place. Fill in the two missing output numbers, when 49 and 81 are dropped in.

INPUT	OUTPUT
64	8
36	6
4	2
100	10
49	
81	



- ★★★ 7. In sixteen more minutes it will be as many minutes before 3 P.M. as it was after 2 P.M. ten minutes ago. What time is it?

Answer: _____

- ★ 8. Estimate the percent of the figure that is shaded.



Answer: _____


SUNSHINE MATH - 6

Uranus, XI

Name: _____
(This shows my own thinking.)

- ★★★★ 1. Harry the Hog is a disgrace to butchers everywhere! He's known for keeping his thumb on the scale for a little extra weight and therefore money. The T-bone sells for \$2.99 a pound, but Harry's thumb has added 0.3 lb. to the scale.

- a. What will you pay for the steak if you don't notice his thumb? _____
- b. What will you pay for the steak if you make him remove his thumb? _____

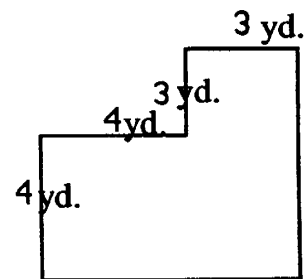


- ★★ 2. A notebook costs \$1 more than a pencil. Together they cost \$1.50. How much does each item cost?

Answer: a) The notebook costs _____.

b) The pencil costs _____.

- ★★★ 3. One of the classrooms at the middle school is shaped like the picture to the right. What is the area of the entire room?



Answer: _____

- ★ 4. Arrange the fractions $\frac{2}{3}$, $\frac{1}{2}$, $\frac{5}{6}$, $\frac{7}{12}$, and $\frac{3}{4}$ in order from smallest to largest.

Answer: _____

- ★★ 5. Johnny had a raise in pay that moved him from \$4.00 an hour to \$4.60 an hour. What was his percentage of increase in pay for one hour?

Answer: The percentage raise was _____% per hour.

- ★★★★ 6. In the array below, the middle entry in each *odd* row is the square of the row number itself. So in the third row, the middle entry is nine, and $3 \times 3 = 9$.

- a) What is the middle entry of the 23rd row going to be?

Answer: _____

			1			→ row 1
		3		5		→ row 2
	7		9		11	→ row 3
13		15		17		→ row 4
21	23		25		27	→ row 5

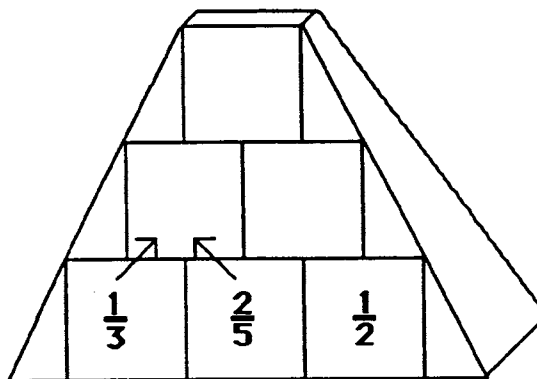
- b) What will be the sum of the numbers in the 10th row?

Answer: _____

- ★ 7. A digit in the fifth place to the left of the decimal point has what place value?

Answer: _____

- ★★ 8. Complete the pyramid by adding adjacent fractions and placing the sum above the two numbers being added. Put your answers in lowest terms in the three squares.



- ★★ 9. To make four servings of cream of wheat, you bring to a boil 4 cups of water, and then mix in $\frac{2}{3}$ of a cup of cream of wheat. But a family of three doesn't want to make four servings.
- a. How much water would be required for three servings of cream of wheat? _____
- b. How much cream of wheat would be required for a serving of three? _____

SUNSHINE MATH - 6

Uranus, XII

Name: _____
(This shows my own thinking.)

- ★★ 1. Goldbach, a Russian mathematician, conjectured that every even counting number greater than 2 can be written as the sum of two different prime numbers. For example, $10 = 3 + 7$.


Write each of these as a sum of two different primes:

a) $26 =$ _____

b) $82 =$ _____

- ★ 2. How many diagonals does a hexagon have?

Answer: _____



- ★★ 3. Mrs. Searcy's class is entering a riddle writing contest sponsored by *MATH WIZZ* magazine. Leila wrote this riddle:

Find 3 integers whose product is -36 and whose sum is 5.

What is the answer to Leila's riddle?

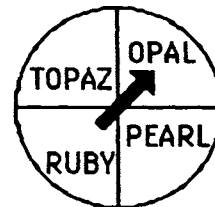
Answer: _____

- ★★ 4. Compute the following: $24 + 33 + 40$

Answer: _____

- ★★★ 5. Mark had to hit the same area of the spinner twice in a row to win his girlfriend a bracelet at the fair. What are his chances of hitting the same area two times in only two spins?

Answer: _____



- ★ 6. Circle the greatest decimal number below.

2.05

2.5

2.005

★★ 7. Use the Egyptian Symbol Chart below to write the Egyptian numeral as a decimal numeral.

Egyptian Symbol		Decimal Numeral
	(stroke)	1
∩	(ox yoke)	10
9	(coil of rope)	100
⊗	(lotus plant)	1000
└	(bent finger)	10,000
🐸	(tadpole)	100,000
🧑	(astonished man)	1,000,000

└└⊗999 = _____

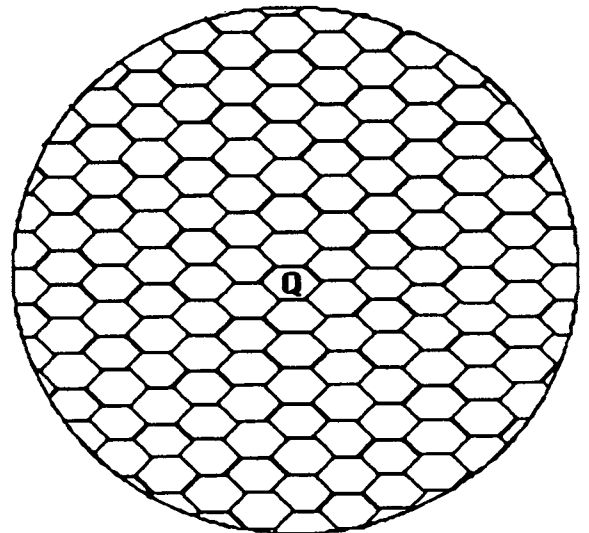
★★★ 8. How can you make change for a dollar using exactly 50 coins and only the coins listed below?

_____ dimes _____ nickels _____ pennies

★★★★ 9. The picture shows a peek at a honeycomb. The queen's nest is shown in the center.

- How many nests touch the queen's nest?

- How many nests touch a nest that touches the queen's nest? _____
- The two sets of nests above could be called neighborhoods 1 and 2. How many nests in neighborhood 3? _____
Neighborhood 4? _____
Neighborhood 5? _____
- What is an expression for the number of nests in Neighborhood n ? _____



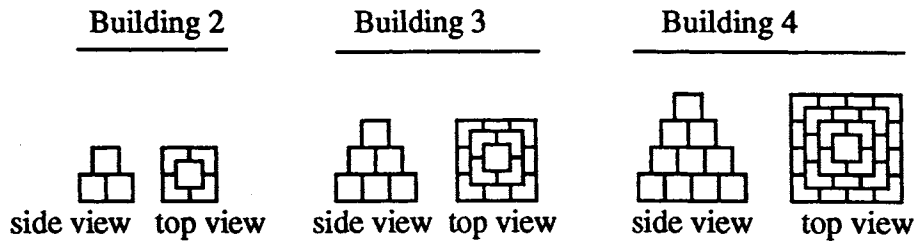
SUNSHINE MATH - 6

Uranus, XIII

Name: _____

(This shows my own thinking.)

- ★★★★ 1. Below you can see the side view and top view of three buildings in a pattern of buildings made from sugar cubes. Study the pattern until you can visualize how Building 5 would look.



- a. Draw the side view and top view of building 5 below.

side view top view

- b. How many cubes would it take to make Building 5? _____
- c. How many cubes would it take to make Building 10 in the pattern? _____

- ★★ 2. A friend tells you she made 96, 83, and 87 on the past three math tests. What must she make on the next test to attain an average of 90?

Answer: _____

- ★★ 3. Compute:

a) $3.7 + 4.78 + 9\frac{3}{5} - 4.09 + 6 =$ _____

b) $\frac{5}{12} + \frac{7}{8} - \frac{2}{3} + 1\frac{1}{2} - 2\frac{3}{24} =$ _____

- ★ 4. A patch of water lilies doubles itself in size each day. From the time the first leaf appeared to the time when the pond was completely covered took 40 days. How long did it take for the pond to be half covered in lily pads?

Answer: _____

- ★★ 5. Look at the graph below. The point (5, 12) has a circle around it, and the point (12, 12) has a box around it. The first number in parenthesis shows how far horizontally to go to find the point, and the second number shows how far vertically to go to find the point. Follow these directions exactly and you should have a word spelled out. Make your lines very heavy, or use a different color, so the lines will stand out against the grid.

Put a big dot at (3, 3).

Connect (16, 7) to (16, 3).

Connect (14, 7) to (14, 3).

Connect (16, 5) to (14, 5).

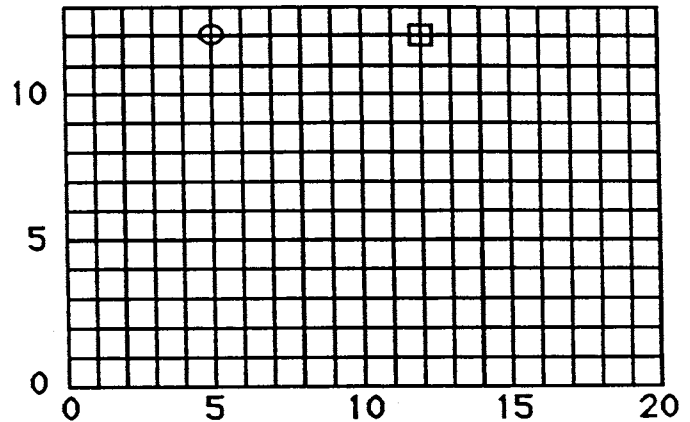
Connect (7, 3) to (7, 7) to (5, 7) to (5, 5) to (7, 5).

Connect (3, 7) to (3, 4).

Connect (8, 3) to (10, 3) to (10, 7).

Connect (11, 7) to (13, 7) to (13, 3) to (11, 3).

Connect (12, 5) to (13, 5).



- ★★ 6. Bob and Alex live in Pensacola, and they want to visit their aunt who lives in Miami. On the way, they want to stop and visit their cousins in Jacksonville. They need to calculate the distance they will travel from Pensacola to Miami, stopping in Jacksonville. On a map, the scale of miles shows that 1 cm represents 50 miles. Pensacola to Jacksonville is 7 cm, and Jacksonville to Miami is 6.5 cm. How many miles will they travel?

Answer: _____ miles

- ★★★★ 7. Name a ten-digit number such that:

The first digit on the left tells how many *zeros* are in the number.
 The second digit from the left tells how many *ones* are in the number.
 The third digit from the left tells how many *twos* are in the number.
 The fourth digit from the left tells how many *threes* are in the number.
 The fifth digit from the left tells how many *fours* are in the number.
 The sixth digit from the left tells how many *fives* are in the number.
 The seventh digit from the left tells how many *sixes* are in the number.
 The eighth digit from the left tells how many *sevens* are in the number.
 The ninth digit from the left tells how many *eights* are in the number.
 The tenth digit from the left tells how many *nines* are in the number.

Answer: _____

SUNSHINE MATH - 6

Uranus, XIV

Name: _____

(This shows my own thinking.)

- ★★★ 1. Carla sold lemonade at the school fair. She had only two sizes of cups: 5 oz. and 8 oz. Her friend Josie wanted to buy exactly 2 oz. How did Carla measure out 2 oz. of lemonade?

For the correct answer, arrange these steps in proper order by writing 1st, 2nd, 3rd, 4th, or 5th in the blanks beside the statements.

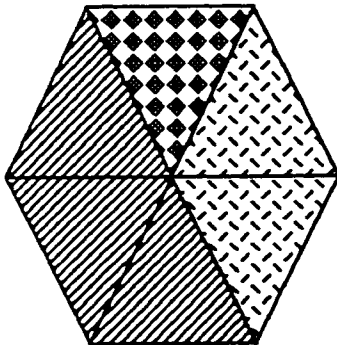
- _____ Pour its contents into the 8 oz. cup.
- _____ 2 oz. will remain in the 5 oz. cup.
- _____ Fill the 5 oz. cup.
- _____ Pour its contents into the 8 oz. cup until the large cup is filled.
- _____ Re-fill the 5 oz. cup.

- ★★ 2. Alison needs to add a liquid vitamin to her horse Bobo's food. The directions on the bottle say to add 7 mL per 25 pounds of the animal body weight. If Bobo weighs 750 pounds, how much vitamin supplement should she add?

Answer: _____ mL



- ★★★ 3. Rounded to the nearest whole percent, what percent of the hexagon is each of the lettered parts?



Answer: A = _____

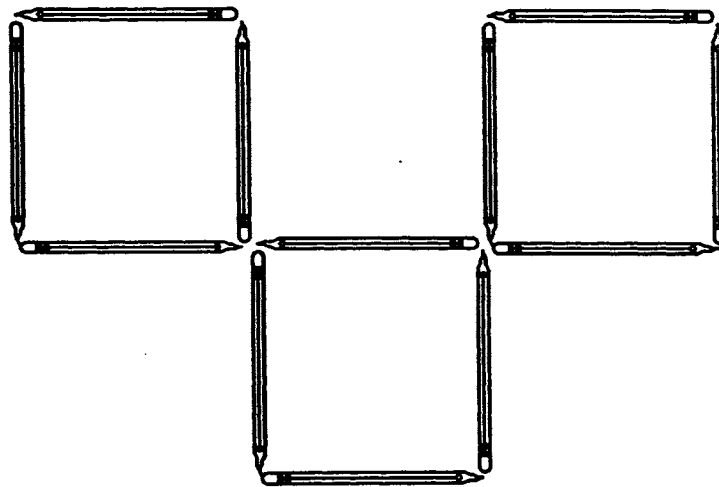
B = _____

C = _____

- ★★ 4. Eight girls are sitting at a table. Five are wearing sweaters, three are wearing coats, and two are wearing both sweaters and coats. How many girls are not wearing a coat or a sweater?

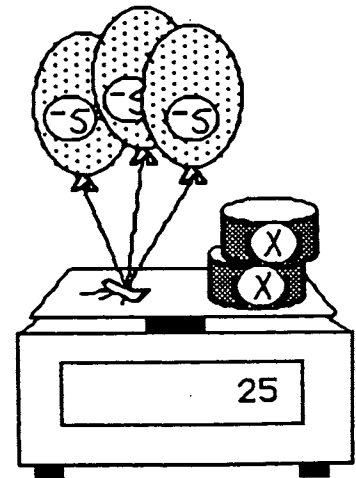
Answer: _____

- ★★★ 5. Three squares have been made from 12 pencils below. Show how to move only three of the pencils, and make four squares this same size.



- ★★★★ 6. The scale below shows three helium balloons attached to a scale, with two cans of unknown weight x . The helium balloons pull *up* on the scale, and so have a negative weight which has previously been measured as -5 because each one exactly balances a 5 gram weight. The cans push *down* on the scale and so have a positive unknown weight. Use your ingenuity to find the weight of one can.

Answer: $x =$ _____ grams



- ★★ 7. One gum ball costs 2 cents. The gum balls come in six different colors. What is the most money you would need to spend to ensure you get 3 gum balls of the same color?

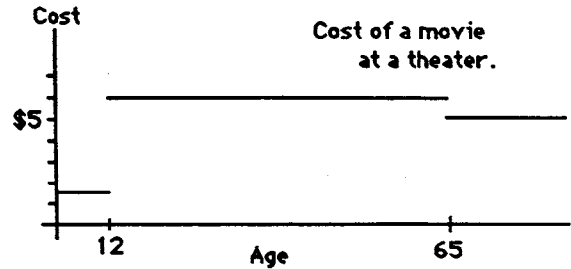
Answer: \$ _____

SUNSHINE MATH - 6
Uranus, XV

Name: _____
(This shows my own thinking.)

★★★ 1. Answer these questions about the graph.

- a. How much does it cost for a 5-year old to go to a movie? _____
- b. How much does it cost a 15-year old to go to a movie? _____
- c. How much does it cost a senior citizen to go to a movie? _____
- d. How much would it cost a father in his 40's and his 8-year old twins to go to a movie? _____



★★ 2. Karen has 20 coins worth \$1.35. The coins are all nickels and dimes. How many of each coin does she have?

Answer: _____ nickels
 _____ dimes

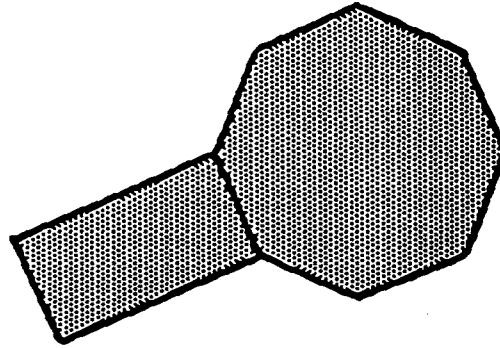
★★★ 3. Five campers agreed to “share the lookout” one night. They divided the time between bedtime (9:00 PM) and sunrise (5:30 AM) into five equal time intervals. Give the resulting times below.

1st watch: 9:00 PM until _____ 4th watch: _____ until _____
 2nd watch: _____ until _____ 5th watch: _____ until _____
 3rd watch: _____ until _____

★ 4. The students at Harry’s school are going to take a field trip. There are 487 students and 45 can ride on each bus. How many buses are needed for the field trip? Circle your answer.

- a) 12 buses
- b) 10 buses
- c) 11 buses

- ★★★★ 5. A rectangle and a regular octagon share a common side. If the length of the rectangle is twice its width and the perimeter is 36 cm, what is the perimeter of the octagon?



Answer: _____ cm

- ★★ 6. Marcus has 3 red marbles, 9 white marbles, and 4 green marbles. He wants to divide all the marbles evenly into two jars, but he only wants two colors in each jar. How can they be divided?

Answer: _____

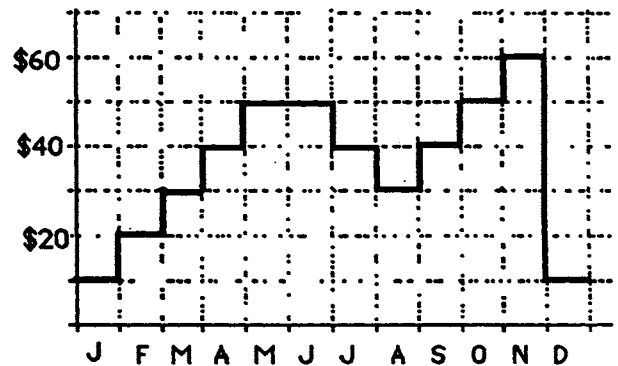
- ★★★ 7. The graph shows the balance in Jeremy's savings account for 1995.

- a. What happened to Jeremy's account during the spring months?

answer: _____

- b. When did the savings drop by \$10 at the end of the month?

answer: _____ and _____



- c. Between what two months did the biggest change occur? _____ and _____

- ★★ 8. Larry's ice cream shop has chocolate macadamia nut ice cream, rocky road ice cream, and strawberry cheesecake ice cream. They also have sugar cones and waffle cones. How many different double-dip ice cream cone combinations (using two different flavors of ice cream) can they make from these selections? The order of the ice cream does not matter, for example, chocolate macadamia on top of strawberry is the same as strawberry on top of chocolate macadamia.

Answer: _____

SUNSHINE MATH - 6

Uranus, XVI

Name: _____

(This shows my own thinking.)

- ★ 1. The number described by these clues can be found in the grid below. Circle the number.

- a) It is greater than $588 + 3$.
- b) It is odd.
- c) It has a ones digit and tens digit whose sum is 6.

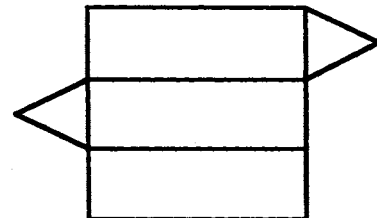
144	324	214
304	233	323
151	342	123

- ★★★ 2. Mrs. Circle has a class of 30 students. For every three girls in the class there are 2 boys. How many boys are in the class?

Answer: _____ boys

- ★★ 3. The picture shows a pattern for making a polyhedron. If you could cut this out and fold it up, what is the name of the polyhedron you would make?

Answer: _____



- ★★ 4. The cheerleaders are making lapel ribbons to sell at the Friday night football game. Each lapel ribbon requires $\frac{1}{4}$ yard of ribbon. They have 60 yards of ribbon with which to make new lapel ribbons. In addition, they have 10 ribbons left from last week's game that they did not sell. All together, how many ribbons will they have to sell at this Friday's game?

Answer: _____

- ★★ 5. In how many different ways can 4 books be arranged on a shelf?

Answer: _____ ways



- ★ 6. Examine this set of numbers to see what they have in common. Then write the next 3 numbers in the set.

2, 3, 5, 7, 11, 13, 17, _____, _____, _____,

- ★★★ 7. Dorothy, Jake, Vicky, Otis, and Nick wore red, blue, yellow, purple, and green jackets. They collected spiders, marbles, hammers, fish, and watches. No two people wore the same color or had the same collection. Use these clues to match the people to the color of their jackets and their collections.

- a) The boy in the green jacket collects spiders.
- b) A girl who collects marbles has a yellow jacket.
- c) Nick's favorite color is red and he always knows what time it is.
- d) Jake's mother is always picking up rocks and putting them in fish bowls.
- e) Dorothy collects hammers and hates the color blue.

NAME	JACKET	COLLECTION
DOROTHY		
JAKE		
VICKY		
OTIS		
NICK		

- ★★ 8. The letters S, T, and U have been left out of the sequence of letters below. Write each in its correct place above or below the line.

A
EF HI KLMN
VWXYZ

BCD
G
J
OPQR

- ★★★★ 9. You have three bottles -- a 10-liter, a 4-liter and a 3-liter. All of the bottles are unmarked and there is no other supply of water available. The 10-liter bottle is full. You want to divide the water in such a way as to have one liter of water in the 3-liter bottle, four liters in the 4-liter bottle and five liters in the 10-liter bottle. You can do this by pouring the water from one bottle to another. What is the fewest number of pourings that will achieve this division of the water?

Answer: _____ pourings

SUNSHINE MATH - 6

Uranus, XVII

Name: _____
 (This shows my own thinking.)

- ★ 1. The star at the right is a "magic star."
 All fractions in each straight line have the same sum. What is the magic sum?

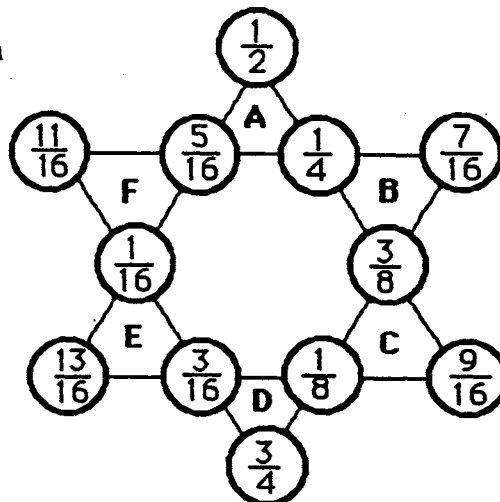
Answer: _____

- ★ 2. Add the fractions at the corners of the two large triangles. First, add the fractions $\frac{1}{2} + \frac{13}{16} + \frac{9}{16}$. Next, add $\frac{11}{16} + \frac{7}{16} + \frac{3}{4}$. What is the magic sum?

Answer: _____

- ★ 3. Finally, add the fractions at the corners of small triangle A: $\frac{1}{2} + \frac{5}{16} + \frac{1}{4}$. Then add the fractions at the corners of each of the triangles marked B, C, D, E, and F. What is the sum of each small triangle?

Answer: _____



- ★★★★ 4. Replace the letters $a - j$ with the digits 0 - 9 to make each of these equations true. You may use each digit only one time.

a) $a + 2 + 5 = 8$

b) $6(b - 8) = 6$

c) $8 + (c + 4) = d$

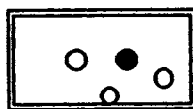
d) $6 + e \times f = 30$

e) $2(g - h) = 10$

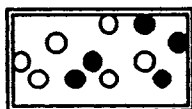
f) $3i + j = 15$

$a = \underline{\quad}; b = \underline{\quad}; c = \underline{\quad}; d = \underline{\quad}; e = \underline{\quad}; f = \underline{\quad}; g = \underline{\quad}; h = \underline{\quad}; i = \underline{\quad}; j = \underline{\quad}$

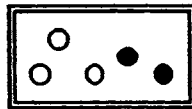
- ★★★★ 5. Rhonda went to a party where they were drawing marbles out of a box for prizes. The player wins if she draws out a black marble on the first draw. Circle the box below that would give Rhonda the best chance of winning.



A



B



C



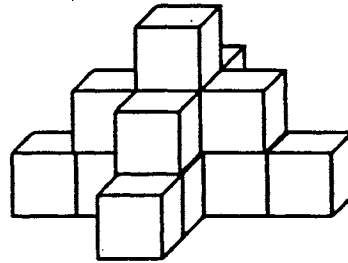
D

- ★ 6. Mrs. Walker bought a board 30 inches long for a class project. She needs to cut it into 1-inch pieces so that each student in her class will have a piece. How many cuts are required?

Answer: _____ cuts

- ★ 7. Joaquin made the figure below by stacking up centimeter cubes. The figure looks this same way when viewed from the back side. What is the volume of the figure?

Answer: ____ cubic centimeters



- ★ 8. Fill in the blanks in the numbers below with the largest digit possible to make each statement true.

a) 4, __ 2 3 is divisible by 3.

b) 2 __, 9 3 6 is divisible by 9.

- ★★★ 9. The "unit fractions" are those whose numerator is 1, such as $\frac{1}{2}$, $\frac{1}{3}$, $\frac{1}{4}$, $\frac{1}{5}$, $\frac{1}{6}$ and so on. Find three different unit fractions whose sum is a whole number.

Answer: _____

- ★ 10. Jessie's total score after 3 games of bowling was 456. If she scored 132 in the fourth and final game, what was her average score per game?

Answer: _____

SUNSHINE MATH - 6

Uranus, XVIII

Name: _____

(This shows my own thinking.)

- ★★ 1. Hickory, dickory, dock
The mouse ran up the clock.
The clock struck four
The mouse ran down.
Hickory, dickory, dock.



If the clock strikes only on the hour, how many times will the clock strike before it strikes only four times again?

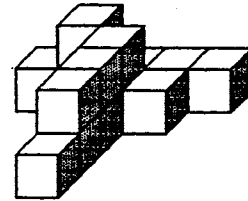
Answer: _____

- ★ 2. What is the prime factorization of the number 30?

Answer: _____

- ★★ 3. How many blocks are in the picture if each block sits on another and there are no hidden spaces?

Answer: _____ blocks



- ★★ 4. Dan is painting letters on the side of a model truck. The letters on the real truck are 40 inches high. The model is $\frac{1}{20}$ the size of the truck. How high should Dan make the letters on the model?

Answer: _____

- ★★ 5. According to the *Guinness Book of World Records*, Michel Lotito is the world champion eater of metal and glass. Since 1966, he has eaten 10 bicycles, 7 TV sets, a Cessna airplane, and a metal coffin, among other things.

His doctors say he can eat up to 2 pounds of metal a day. At this rate, how long would it take him to eat a small car, which weighs about 1 ton?

Answer: _____ years and _____ days

- ★★★ 6. Draw the 100th figure for the pattern below:



Answer: _____

- ★★ 7. Write the number of things in a dozen. Multiply it by the number of inches in a foot. Multiply that by the number of months in a calendar year. Multiply that by the number of items in the set of numbers on a clock. Write your answer below.

Answer: _____


- ★★ 8. One day Jimmy's teacher gave the class the correct answers to their math examples but she failed to put in the decimal points. Help Jimmy decide where to place the decimals by rounding off the numbers involved, and estimating. Place the decimal points in the proper place.

a) $7.436 \times 3.89 = 2892604$

b) $3.773 + 0.98 = 385$

- ★★★★ 9. Sheila bought a couple of identical helium balloons at the mall. She was testing out their "pull power" with her science kit, and found that one balloon and a 25-gram weight exactly balanced a 10-gram weight. Then she tested a bag of groceries, and found that the two balloons and bag of groceries exactly balanced the same 25-gram weight. Sheila said "Aha -- I know how much the groceries weigh." How much *do* the groceries weigh?

Answer: _____ grams



- ★★ 10. What would the next set of letters in this pattern be?

AN, bo, DQ, gt, _____, ...

SUNSHINE MATH - 6
Uranus, XIX

Name: _____

(This shows my own thinking.)

- ★ 1. A football player ran from his own 38-yard line to the other team's 40 yard line. How long was his run?

Answer: _____ yards

- ★★ 2. Ryan can walk to school in $\frac{6}{15}$ of an hour. When he rides his bike, he can get there in 8 minutes. Can Ryan get to school quicker by walking or by riding his bike? How many times faster?

Answer: a) Ryan can get to school faster by _____.

b) _____ times faster.

- ★★★★ 3. Look at the equations to the right:
A, B, C, and D are whole numbers.

$$\begin{aligned}A \times B &= 24 \\A + B &= 14 \\C \times D &= 48 \\A \times D &= 192 \\B \times C &= 6\end{aligned}$$

What number is A? _____ What number is B? _____

What number is C? _____ What number is D? _____

- ★★★ 4. Start as shown. Draw only 4 straight lines to connect all 9 dots. Do not lift your pencil until all the dots are covered.




- ★★★ 5. Maria and Sarah are cutting strips of fabric for streamers to use in the P.E. show. Each strip needs to be $2\frac{1}{4}$ inches wide. How many strips can they cut from 6 feet of fabric if they cut from selvage to selvage?

Answer: _____ strips can be cut.

★★ 6. Write the missing digits in the problem:

$$\begin{array}{r}
 \square \square \\
 19 \overline{) \square 3 \square} \\
 \underline{\square \square} \\
 \square \square \\
 \underline{\square \square} \\
 \square \square \\
 \underline{\square \square} \\
 0
 \end{array}$$

★★★★ 7. Assume the area of the big square is 36 cm^2 . Name the areas of the parts described.




Black region: _____ cm^2
 Dotted region: _____ cm^2
 Striped region: _____ cm^2
 Crossed region: _____ cm^2

★★ 8. If you shot 3 arrows at this target and all 3 arrows hit the bull's eye, you would score 15 points.

If exactly 3 arrows hit this target, how many different total scores are possible?

Answer: _____



SUNSHINE MATH - 6

Uranus, XX

Name: _____
(This shows my own thinking.)

- ★★ 1. I am a four-digit number.
All of my digits are *odd* numbers.
Each of my digits is different.
My *thousands* digit is the smallest counting number.
My *tens* digit is less than my units or hundreds digit.
The sum of my first and last digits is the same as the sum of my two middle digits.

What number am I?



- ★★★ 2. Karen's company needed to reduce its expenses. Her salary was cut by 10%. Later, her company decided to give her a raise. By what percent must her salary then be raised to bring it back to the original amount?

Answer : _____ percent

- ★ 3. What math symbol can be placed between the 2 and the 3 in "23" to make a number greater than 2 but less than 3?

Answer: _____

- ★★ 4. A spaceship launched from Earth was in orbit for $29\frac{1}{2}$ days. What is the closest estimate for the number of hours it was in orbit? Ring your answer.

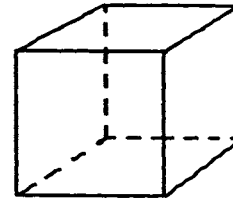
a) 700 hours b) 750 hours c) 650 hours

- ★ 5. The sixth grade math club gave this problem to its members to solve:

$$\boxed{13.6} + \boxed{2.7} - \boxed{4.8} \times \boxed{1.7} + \boxed{0.11} \Rightarrow \boxed{}$$

Solve the problem for them by writing the correct answer in the box. But don't forget "My Dear Aunt Sally" or you'll miss it!

- ★★ 6. Number each of the eight corners on the cube from 1 to 8 so that the sum of any four numbers at the corners of each face is 18.



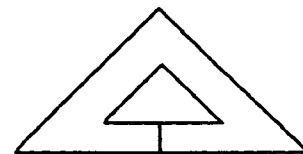
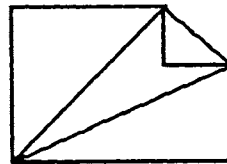
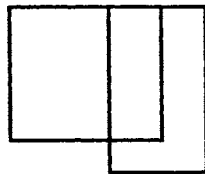
- ★★★ 7. The telephone company has 16 computer-controlled switching systems. Each system handles 650,000 calls *an hour*. The systems work with 98% accuracy. How many calls would not be accurately answered in *a day*?

Answer: _____ calls

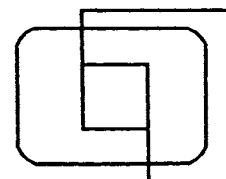
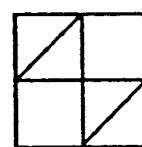
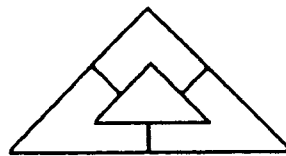

- ★★ 8. There are two ways you can make change for a dollar bill using exactly 50 coins. How many of each coin would you use for each way? Write your answers in the chart below.

	pennies	nickels	dimes	quarters	half dollars
first way:					
second way:					

- ★★★ 9. The designs below are called *one-drawable*. This means you can draw them with one continuous line without lifting your pencil or retracing a line, if you start in the right place.



Which of the designs below are *one-drawable*? Circle your answers.



SUNSHINE MATH - 6


Uranus, XXI

Name: _____
 (This shows my own thinking.)

- ★★★ 1. How much change will you get back from a \$5 bill if you order a cheeseburger platter? Sales tax is 5%, and is always rounded up to the next penny if necessary.

Answer _____

Hamburger	\$2.00	fries	.89¢
Cheeseburger	\$2.15	cola	.99¢
Tuna melt	\$2.45	shake	\$1.39
<i>Platter (includes sandwich, fries and cola): add \$1.45 to sandwich price</i>			



- ★ 2. Iris looked at the sign above, asked for a cola, and gave the clerk a penny and told him to "keep the change." Why was she justified for doing this, mathematically speaking?

Answer: _____


- ★★ 3. Josie's hobby is learning everything about the Presidents of the United States. Her friend Jacque loves math. Jacque posed the following situation to Josie: Find the number of letters in the last name of the third President of the United States. Add the total number of letters in the last name of the President elected in 1976. Now find the prime factors of this number. What is the correct answer?

Answer: _____

- ★★★ 4. The softball team won 70% of its games and won 4 more than it lost. How many games did the team lose?

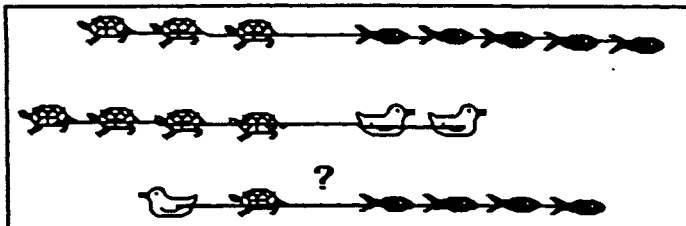
Answer: _____ games

- ★★ 5. What happens to the *area* of the piece of cardboard to the right if its length and width are both doubled? Circle the best answer.



- a. The area doubles. c. The area gets smaller.
 b. The area stays the same. d. The area is 4 times as great.

- ★★ 6. Dirk trained his water babies to have tug of war contests. He found that 3 turtles could tug the same as 5 goldfish, and 4 turtles could tug the same as 2 baby ducks. Which team would win between a baby duck and a turtle matched against 4 goldfish? Circle the winners below.



- ★★★ 7. In a gymnastics competition, five judges award scores on a 10-point scale for each event. The high and low scores are discarded before an average score is determined. The judges' scores for Terri's vault at a recent competition were 8.3, 9.0, 8.8, 7.5 and 8.4. What was Terri's score for the vault?

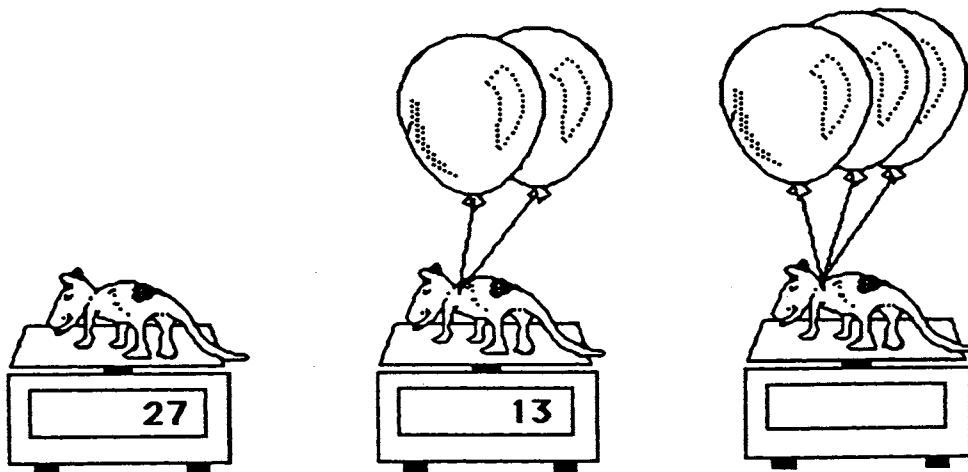
Answer: _____

- ★★★★ 8. Hannah kept track of the new baby elephant at the zoo. At one month the baby weighed 2 kg. At 2 months, he weighed 5 kg. At 3 months, he weighed 14 kg, and at 4 months he weighed 41 kg. Hannah noticed a pattern -- what was her prediction for his weight at 7 months?



Answer: _____ kg

- ★★ 9. Andy weighed his dog, then attached two identical helium balloons to his collar and weighed him again. If he attached a third identical balloon to the dog, what would the scale read? Write the correct answer in the scale.



SUNSHINE MATH - 6
Uranus, XXII

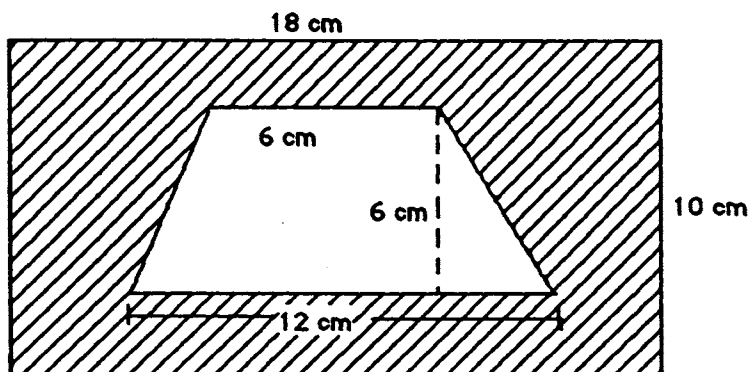
Name: _____

(This shows my own thinking.)

- ★ 1. What is the difference between the sum of twice 50 and twice 7, and twice 57?

Answer: _____

- ★★★ 2. It costs \$1 per cm^2 to add gold plating to a surface. What will it cost to gold plate the shaded region below, which is a rectangle with a hole cut in it?



Answer: \$ _____


- ★ 3. A friend tells you that she is thinking of two 2-digit numbers and gives you the following clues. Find the numbers your friend is thinking of.

- The numbers have the same digits, only reversed in position,
- The sum of the digits is 8 in each number, and
- The difference between the two numbers is 36.

Answer: _____ and _____

- ★★★ 4. A cube has a volume of 64 cubic inches. If you had to attach "string ribbon" to all of the edges of this cube, how many inches of ribbon would you need?

Answer: _____



- ★ 5. Try adding these numbers mentally. Look for numbers that go together naturally to give 100, and add them first.

$$45 + 25 + 15 + 55 + 75 =$$

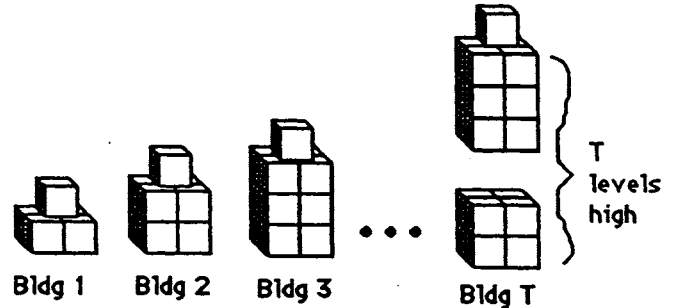
Answer: _____

- ★★★ 6. Consider the pattern of buildings below, made from blocks

a. How many blocks would the 4th building require? _____

b. How many blocks would the 5th building require? _____

c. How many blocks would the 25th building require? _____

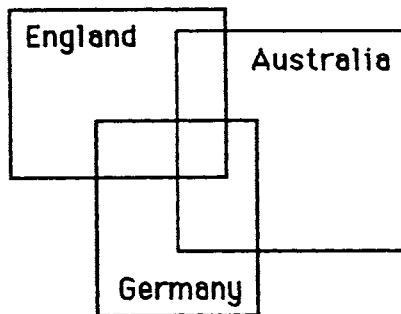


- ★ 7. How many blocks would it take to make building T in the pattern above, where T can be any whole number?

Answer: To make building T , I need this many blocks: _____

- ★★★ 8. In the *Stamps are Beautiful* stamp collecting club, 21 members have stamps from England, 19 members have stamps from Germany, and 11 members have stamps from Australia. Some of these same members have stamps from more than one country. Six have stamps from England and Germany, 4 have stamps from Germany and Australia, and 2 have stamps from England and Australia. No member has stamps from all three countries. How many members are in the *Stamps are Beautiful* stamp club? (HINT: Use the Venn diagram below.)

Answer: _____



SUNSHINE MATH - 6


Uranus, XXIII

Name: _____


(This shows my own thinking.)

- ★★★ 1. You've heard of π , and so has the mathematician who designed this new speed limit sign. To the nearest whole number, what is the speed limit here? Circle the best choice below.

- a. 25 mph b. 40 mph
c. 55 mph d. 60 mph
e. 65 mph f. 75 mph



- ★★ 2. A steering wheel is shown below. How many degrees clockwise would you have to rotate this steering wheel before it looks like it's in its original position?



Answer: _____ degrees

- ★★★ 3. Try this number trick on several friends. What is the answer they always get, if they do it correctly?

Answer: _____

Number Trick:

Take the number of brothers and sisters you have.

Double this number.

Add 4.

Multiply by 5.

Add one.

Subtract 10 times the number of brothers and sisters.

What is your answer?

- ★★★ 4. If you started counting on April fool's day at 8:00 AM, and counted 1 number a second, non-stop, 24 hours a day, on what day would you get to 1 million?

Answer: _____

★★ 5. Wayne wrote the months of the year on twelve identical cards and put them in a bag. He told his younger brother to pull one out without looking. If the brother drew out his birthday month, Wayne would do his chores for that month for his present. If his brother pulled out a summer month, Wayne promised to take him along whenever he went to the pool, as his present.

a. What is the brother's chance of drawing out his birthday month? _____

b. What is his chance of drawing out a summer month of June, July, or August? _____

★★★ 6. Arrange the digits 1 through 9 in the boxes below so that each row across and each column down has the same total.


★★ 7. There's only one thing wrong with the problem to the right. What is incorrect?

Answer: _____

$$\begin{array}{r}
 3.71 \\
 \times 4.05 \\
 \hline
 405 \\
 2835 \\
 + 1215 \\
 \hline
 1502.55
 \end{array}$$

★★★ 8. Mario wanted to get a tune up for his bike before an upcoming road trip with his scout troop. The bike shop charges 25¢ to check and tighten each spoke, \$5.00 to tighten and oil the chain, \$8.00 to adjust the gears, and \$1.50 to inflate the tires properly. How much would this tune up cost him?

Answer: _____



SUNSHINE MATH - 6

Uranus, XXIV

Name: _____

(This shows my own thinking.)

★★★ 1. Solve each problem below. The data comes from the *Guinness Book of World Records*. Round your answers to the nearest whole number.

a. The longest distance travelled by a go-kart in a 24-hour race is 1,018 miles. What was its average speed in miles per hour?

Answer: _____

b. The longest distance travelled by a truck riding on 2 side wheels is 2,864 miles. How far did the other two wheels travel on the trip?

Answer: _____

c. The fastest long-distance drive *backwards* in a car went 501 miles in 17.6 hours. What was the average speed for the car?

Answer: _____

★★★ 2. Tamara forgot to buy candles for her older brother's birthday cake, so she used the ones she had left from a previous birthday. She told him "Two candles stand for 6 years." How old was her older brother?



Answer: _____

★★★★ 3. Try this number trick on three people, except for the final step of telling their age and amount of change. Write down the answers each person gives you, together with their age and the amount of pocket change they have. Then decide how you can say how old they are, and how much change they have, *just from looking at the final answer they give you*.

Age and Pocket Change

by Dr. Wonderful

Step 1. Take your age (years).

Step 4. Subtract the number of days in 1 year.

Step 2. Double it, then add 5.

Step 5. Add your pocket change (e.g., 49¢)

Step 3. Multiply by 50.

Step 6. Add 115. What's your answer?

Aha: You are ___ years old and have ___¢ in your pocket.

Answer: When I hear their final answer, _____ tells me how old they are, and _____ tells me their change.

★★ 4. Find 40% of $(13.5 - 2.08 + 8\frac{58}{100})$:


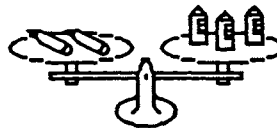

Answer: _____

★★★ 5. If you can read this message, then perhaps you are clever enough to solve this problem:

If 2 boys and 2 girls were at a party and had to
 dance, how many different dances must be
 scheduled so that each boy danced with each girl?
 Answer: _____


★★ 6. Find the weight of a pencil. The scale is set to measure grams.

Answer: ____ grams



★ 7. The collection of gears below has seven gears in all. If you turn the one with the handle in a clockwise direction, in which direction will the seventh gear turn?

Answer: _____



SUNSHINE MATH - 6
Uranus, XXV

Name: _____

(This shows my own thinking.)


- ★★ 1. A person your age is usually awake about fourteen hours each day. Your eye blinks about 25 times a minute when you're awake.

a. About how many times each day do your eyes blink?

Answer: _____ times

b. About how many times per year do your eyes blink?

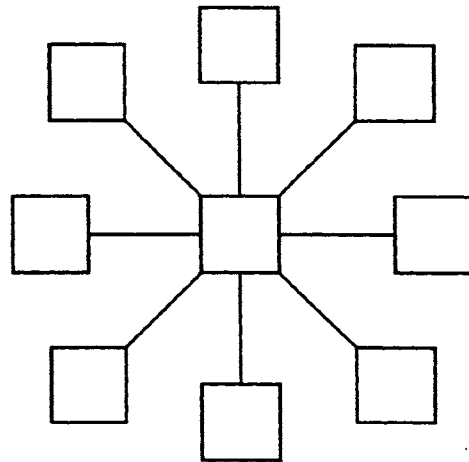
Answer: _____ times



- ★★ 2. Sue and Sally were building their own bowling alley. There would be 15 lanes, each needing ten pins. However, due to damage, they needed to keep on hand 20% more pins than were in use at any given time. How many pins did they need to purchase?

Answer: _____ pins

- ★★★ 3. Put the numbers 10 through 18 in the diagram below in such a way that the sum of the three numbers along any line totals 42.



- ★★★ 4. A *perfect number* is one that is the sum of its proper divisors. Six is a *perfect number* because $6 = 1 + 2 + 3$. In the set of whole numbers, six is the first *perfect number*. What is the second *perfect number*? (Hint: It is less than 30.)

Answer: _____

- ★ 5. Rebecca bought 3 new cassette tapes on sale. She went into the music store with \$27 and came out with \$6. What was the average cost for the tapes?

Answer: _____


- ★★★★ 6. Sam keeps track of several stocks on the stock market. He watched one stock for five consecutive days and recorded the activity. On Monday morning, his favorite stock opened at $12\frac{1}{2}$ and gained $\frac{3}{4}$ points that day. On Tuesday there was a gain of $1\frac{3}{4}$ points.

Wednesday the stock lost $5\frac{1}{2}$ points. On Thursday there was a change of $+2\frac{5}{8}$ points. On Friday afternoon the stock closed at $14\frac{1}{4}$. What was the change for Friday over Thursday's standing?

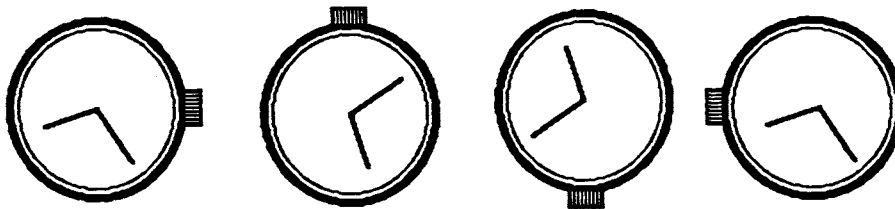
Answer: _____

- ★ 7. How many times does a symbol or word name for the number *one* appear on the dollar bill below?

Answer: _____ times



- ★ 8. Consider the watch face to the right. Turn it 180°, then flip it over to the left. Circle the figure below that shows what it would look like.



SUNSHINE MATH - 6
Uranus, XXVI

Name: _____

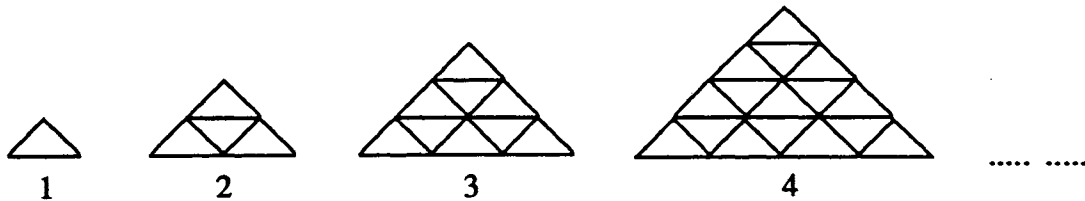
(This shows my own thinking.)

- ★★ 1. For every new car made, 5 tires and 2 headlights must be made also. If the car manufacturer purchased 400 tires for its new cars one week, how many headlights did they need to purchase for those cars?



Answer: _____ headlights

- ★★★ 2. The drawing below shows triangles made from toothpicks, in a pattern. Figure 1 requires 3 toothpicks; figure 2 requires 9.



- a. How many toothpicks would be required for the 5th figure? _____
 b. How many toothpicks would be required for the 6th figure? _____
 c. How many toothpicks would be required for the 10th figure? _____

- ★ 3. Ashley is reading her favorite novel a second time and has read $\frac{2}{5}$ of it. The book is 495 pages long. How many more pages does she have to read to finish the book?

Answer: _____ pages

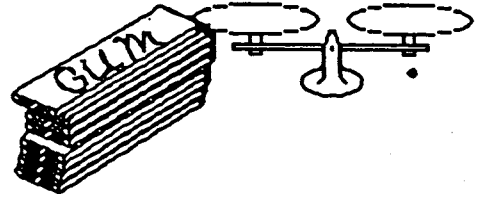


- ★★ 4. Daniel is using masking tape to hang pictures around the classroom. Each picture uses 1 ft. 2 in. of tape. How many pictures can he hang if he has a 20-foot roll of tape?

Answer: _____ pictures

- ★★★★ 5. Your teacher caught you chewing gum and took away the rest of the pack—9 sticks. He removed the wrapping from one stick, replaced the gum with a piece of cardboard the same size and shape but which weighed less. He then re-wrapped it. Now the lighter-weight stick looks and feels like the rest.

You can avoid going to the principal. You must tell him how to find the fake piece by using the balance scale only two times. Explain your reasoning, or go ahead on down the hall.



Answer: *Attach a sheet of paper with your explanation, that starts like this:*

For the first weighing, I would:

For the second weighing, I would:

- ★ 6. A deep-sea fishing boat is tied to a dock in the harbor. Over its side hangs a rope ladder with its bottom rung almost touching the water. Rungs of the ladder are 1 foot apart. The tide begins rising at the rate of 8 inches per hour. At the end of six hours, how many rungs will be covered by water?

Answer: _____

- ★★ 7. A traffic court judge imposed a fine for speeding. The fine was \$80, plus \$1.75 for every mile per hour the speed limit was exceeded. What was the fine the judge imposed for traveling 57 mph in a 45 mph zone?

Answer: _____

- ★ 8. A square garden has five fence posts on each side. How many fence posts are there around the garden?

Answer: _____

- ★★★ 9. If you and four of your friends can stand on a square yard of carpet, how many of you can stand in a classroom that is 27 feet by 36 feet?

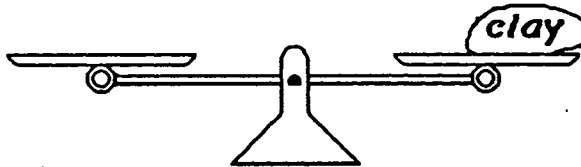
Answer: _____ people

SUNSHINE MATH - 6
Uranus, XXVII

Name: _____

(This shows my own thinking.)


- ★★★★ 1. Mark claims the lump of clay weighs 25 grams, but only has a 1-gram, a 3-gram, a 9-gram, and a 27-gram weight to use for the balance scale. Show where he can place the weights to prove the clay weighs 25 grams.



- ★★ 2. If your math scores were 76, 76, 83, 85, and 90, which statistic would give you the best final grade -- the *mean*, the *median*, the *mode*, or the *range* of these scores?

Answer: _____

- ★★★ 3. How can you arrange 4 pennies, 4 nickels, 4 dimes, and 4 quarters in this grid so that each row, each column, and each diagonal contain exactly one of each type of coin? Write P, N, D, or Q in each square to show your solution.



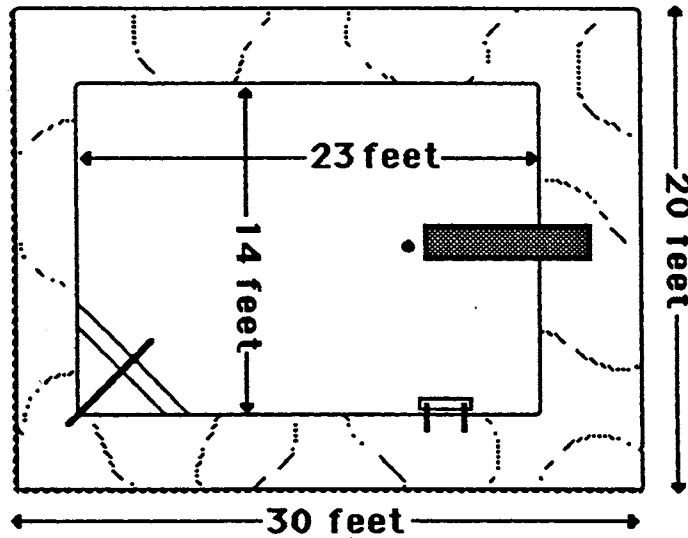
- ★★ 4. Diana and Felicia want to can 12 quarts of tomatoes from their family's garden. They already have 7 quart jars and 6 pint jars. If only quart and pint jars are available, what is the fewest number of jars they can buy to have enough?

Answer: _____ jars

- ★ 5. What is the probability of being born in a month with more than 30 days?

Answer: _____

- ★★★★ 6. The diagram below shows a new swimming pool at the city park. The pool contractor wants to border the pool with ceramic tiles that are 6" squares. If each tile costs \$2.75, what is the total cost of the tiles?



Answer: _____

- ★★ 7. Timothy received three \$20 bills for his birthday. He wants to buy a tennis racquet for \$29.95 and two cans of tennis balls for \$2.49 each. He also wants to buy a new tennis shirt for \$14.95. About how much money should he have left, if his mom agrees to pay the tax? Circle the correct answer.

a) \$10 b) \$5 c) \$15

- ★★ 8. Tim earned some extra money and bought some new CDs. 50% were rock, 25% were country-western, and the rest were classical. He bought 3 classical CDs. How many CDs did he buy?

Answer: _____

- ★ 9. Cleopatra was 39 years old when she died in 30 BC. In what year was she born?

Answer: _____